

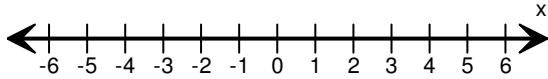
Name: _____

Score: _____

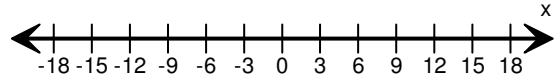
Graphing Inequalities

Graph the inequality:

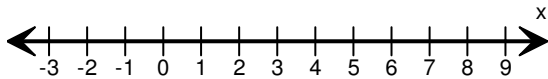
1) $x > -2$



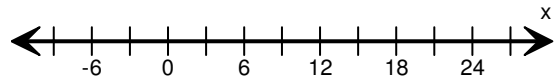
2) $x \leq -3$



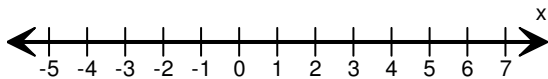
3) $x < 7$



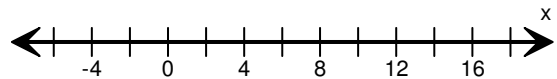
4) $x \geq 12$



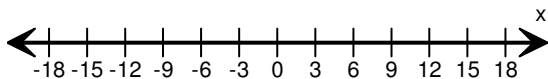
5) $x < 4$



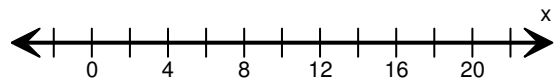
6) $x \leq 8$



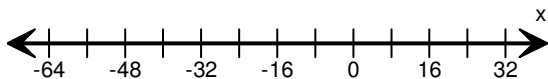
7) $x \geq 3$



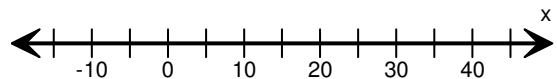
8) $x < 12$



9) $x \leq -24$



10) $x > 20$

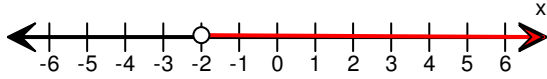


Name: _____

Score: _____

Answers:

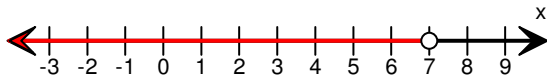
1) $x > -2$



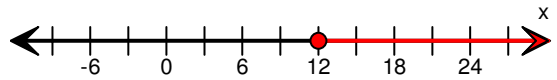
2) $x \leq -3$



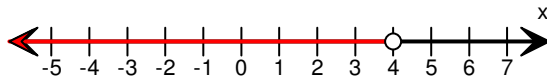
3) $x < 7$



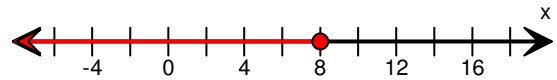
4) $x \geq 12$



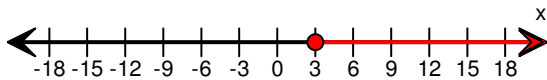
5) $x < 4$



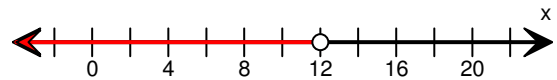
6) $x \leq 8$



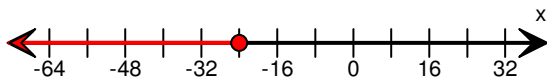
7) $x \geq 3$



8) $x < 12$



9) $x \leq -24$



10) $x > 20$

