

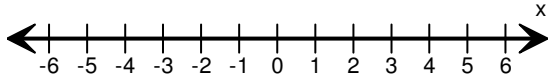
Name: \_\_\_\_\_

Score: \_\_\_\_\_

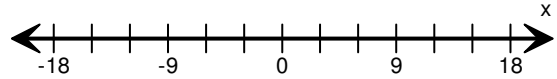
### Graphing Inequalities

Graph the inequality:

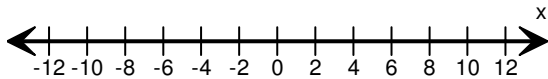
1)  $x > 1$



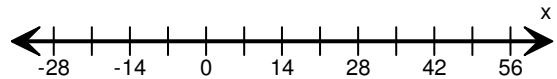
2)  $x \leq 9$



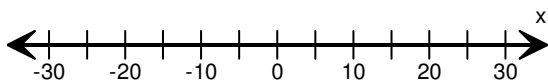
3)  $x \leq -2$



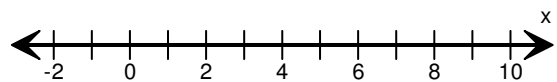
4)  $x \geq 21$



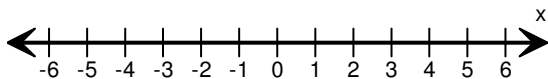
5)  $x > 10$



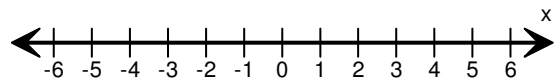
6)  $x \geq 6$



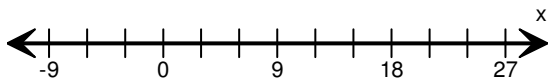
7)  $x \leq 3$



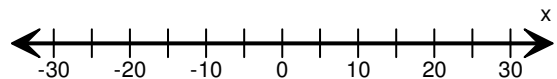
8)  $x > -2$



9)  $x \geq 9$



10)  $x \leq 5$

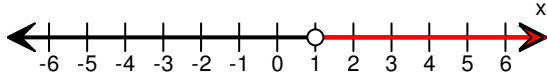


Name: \_\_\_\_\_

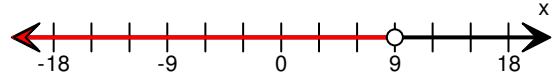
Score: \_\_\_\_\_

Answers:

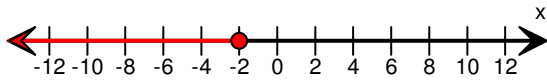
1)  $x > 1$



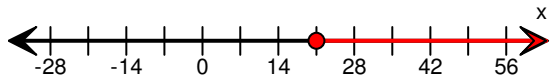
2)  $x \leq 9$



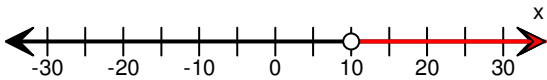
3)  $x \leq -2$



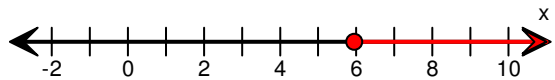
4)  $x \geq 21$



5)  $x > 10$



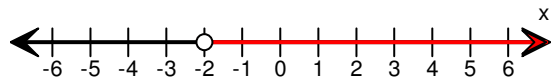
6)  $x \geq 6$



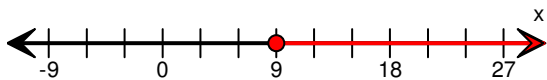
7)  $x \leq 3$



8)  $x > -2$



9)  $x \geq 9$



10)  $x \leq 5$

